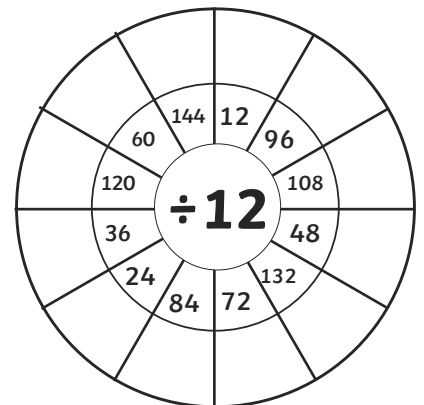
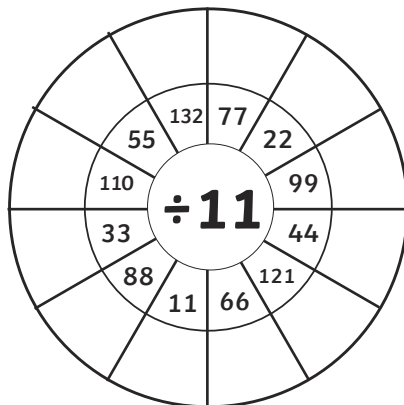
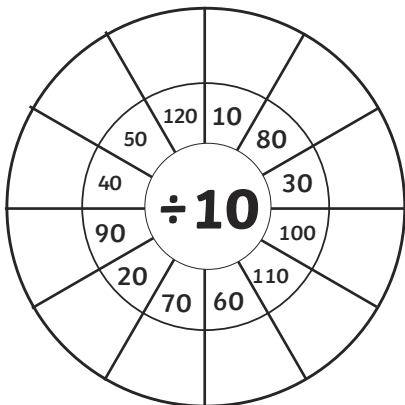
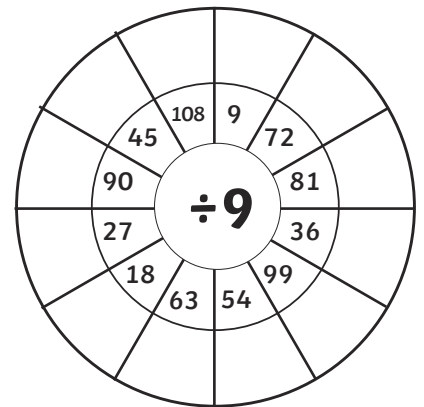
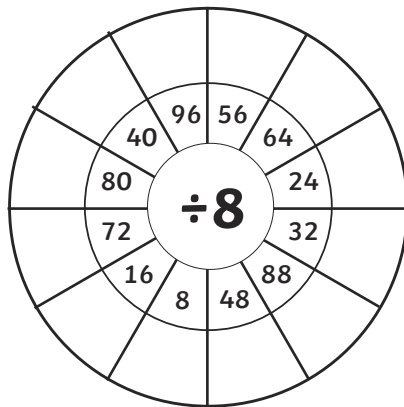
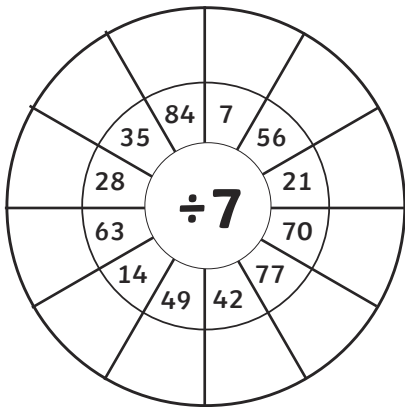
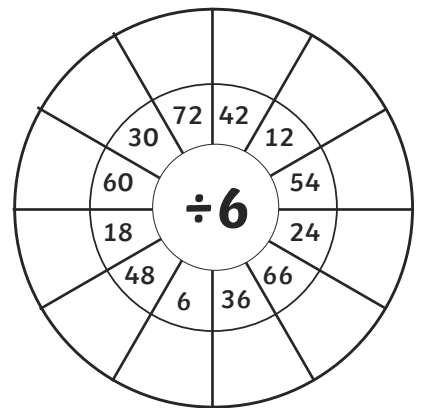
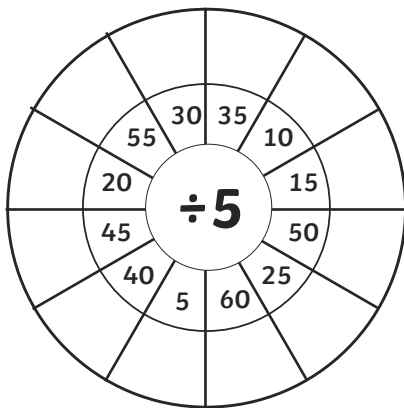
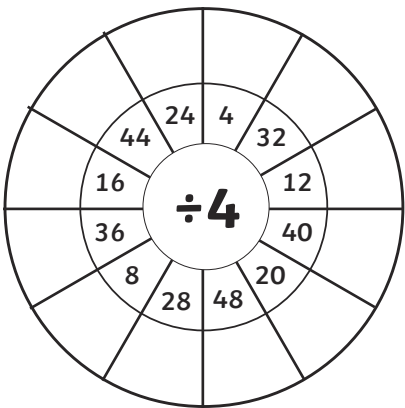
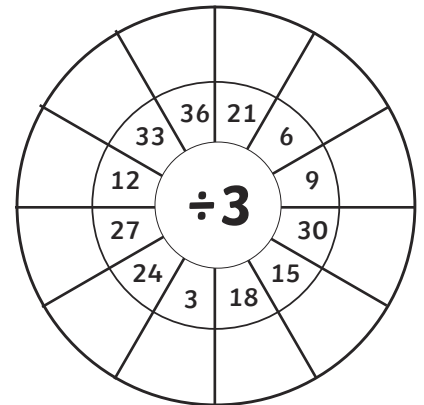
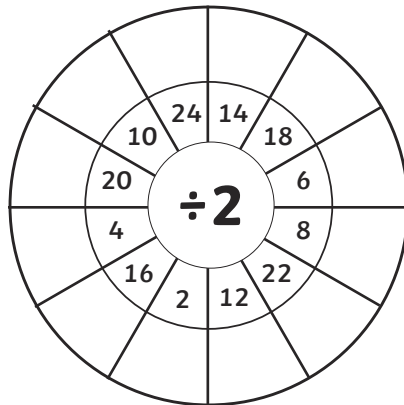
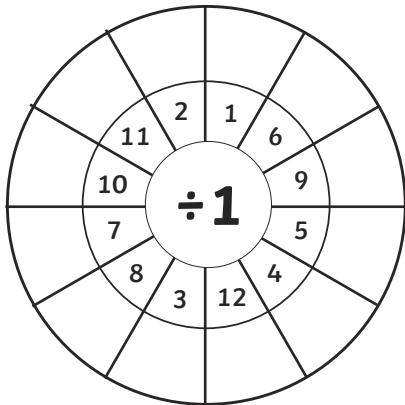
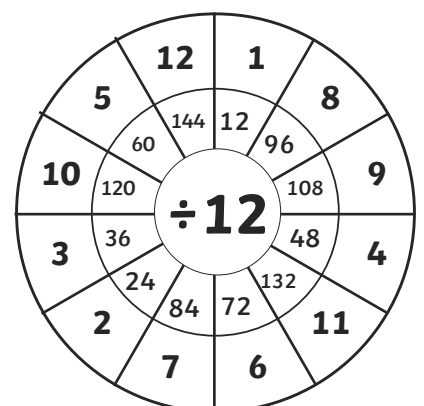
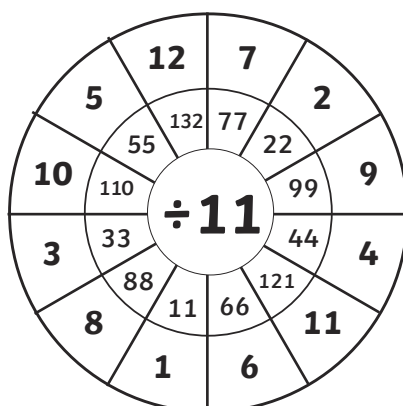
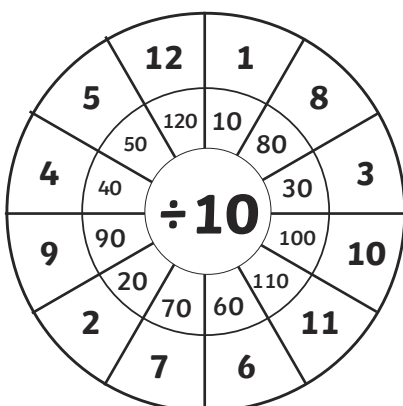
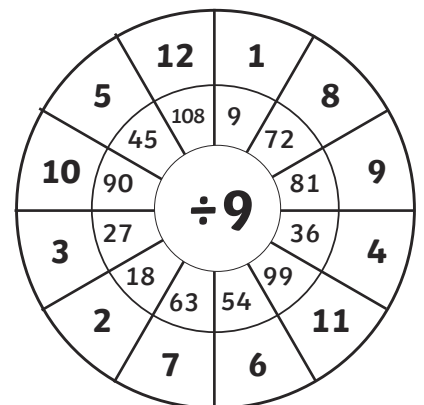
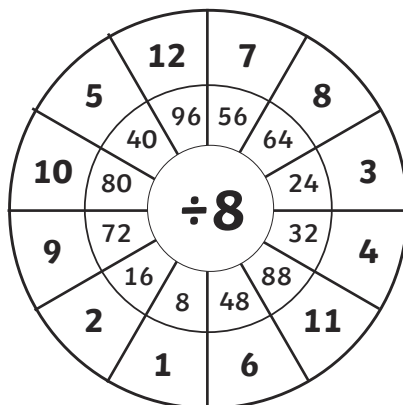
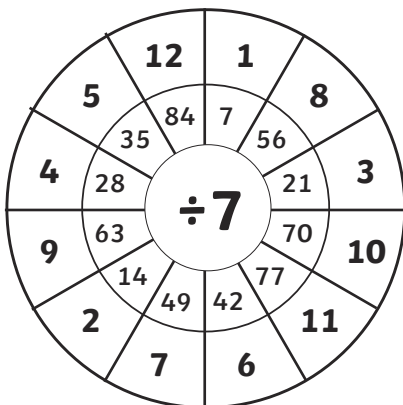
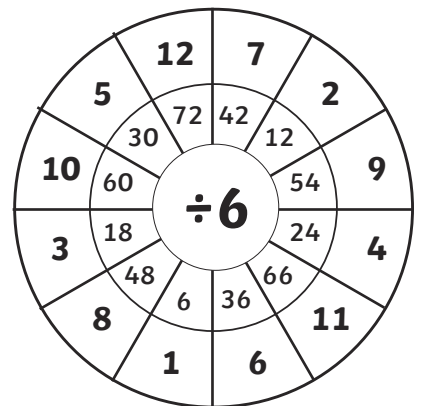
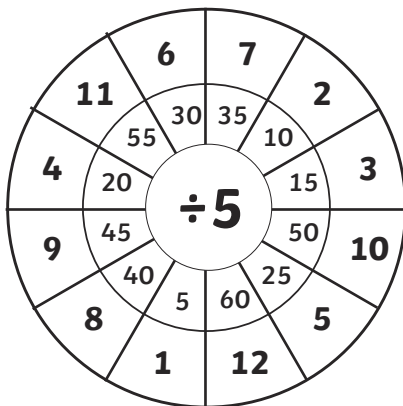
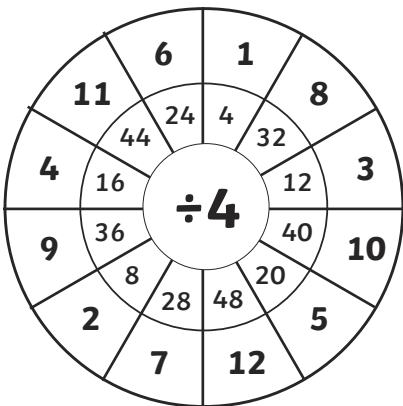
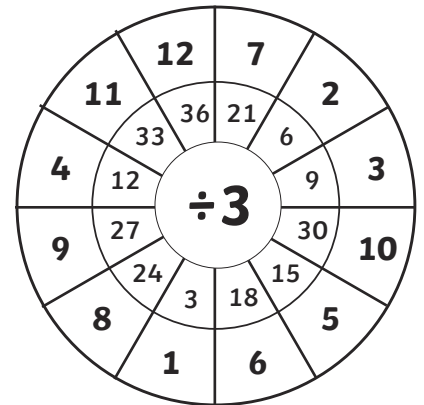
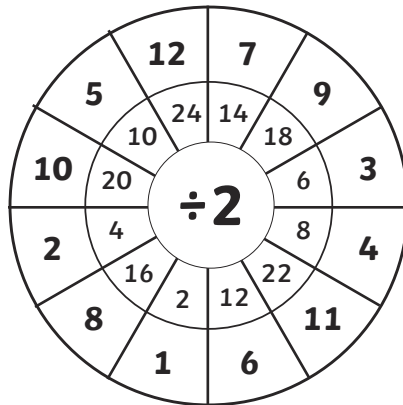
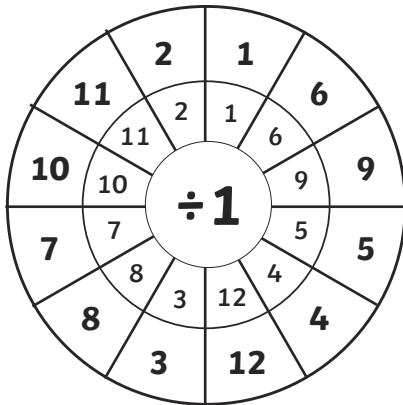


# Division Wheels

Divide the numbers by the middle number.



# Division Wheels Answers



# Dividing Mentally Using Known Facts

Start this activity by recording the answers to these multiplication questions.




Now use these multiplication facts to answer the following division questions:

1. $24 \div 6 =$	2. $36 \div 9 =$	3. $21 \div 3 =$	4. $42 \div 6 =$
5. $18 \div 6 =$	6. $48 \div 8 =$	7. $49 \div 7 =$	8. $54 \div 6 =$

<b>9.</b> $28 \div 4 =$	<b>10.</b> $36 \div 6 =$	<b>11.</b> $210 \div 3 =$	<b>12.</b> $420 \div 6 =$
<b>13.</b> $180 \div 6 =$	<b>14.</b> $480 \div 8 =$	<b>15.</b> $490 \div 7 =$	<b>16.</b> $540 \div 6 =$
<b>17.</b> $280 \div 4 =$	<b>18.</b> $360 \div 6 =$	<b>19.</b> $240 \div 6 =$	<b>20.</b> $360 \div 9 =$
<b>21.</b> $210 \div 30 =$	<b>22.</b> $420 \div 60 =$	<b>23.</b> $180 \div 60 =$	<b>24.</b> $480 \div 80 =$
<b>25.</b> $480 \div 80 =$	<b>26.</b> $540 \div 60 =$	<b>27.</b> $280 \div 40 =$	<b>28.</b> $360 \div 60 =$
<b>29.</b> $240 \div 60 =$	<b>30.</b> $360 \div 90 =$		

# Correspondence Type Word Problems:

## Answers



question	answer	question	answer
1	4	16	90
2	4	17	70
3	7	18	60
4	7	19	40
5	3	20	40
6	6	21	7
7	7	22	7
8	9	23	3
9	7	24	6
10	6	25	6
11	70	26	9
12	70	27	7
13	30	28	6
14	60	29	4
15	70	30	4